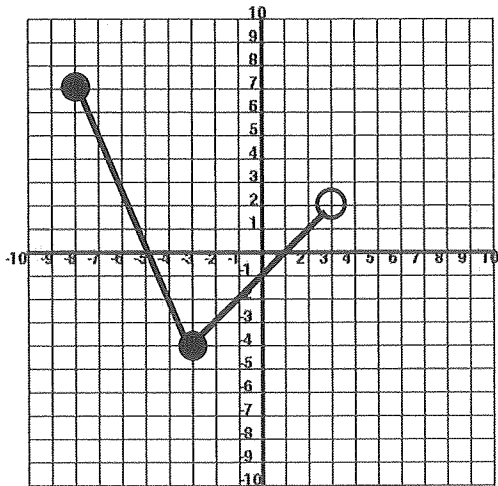


Name _____ Period _____ Date _____

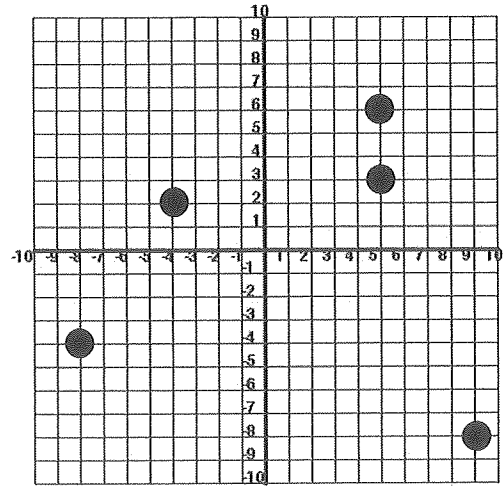
Domain and Range Match

Graph	Domain	Range	Function?
1			
2			
3			
4			
5			
6			
7			
8			

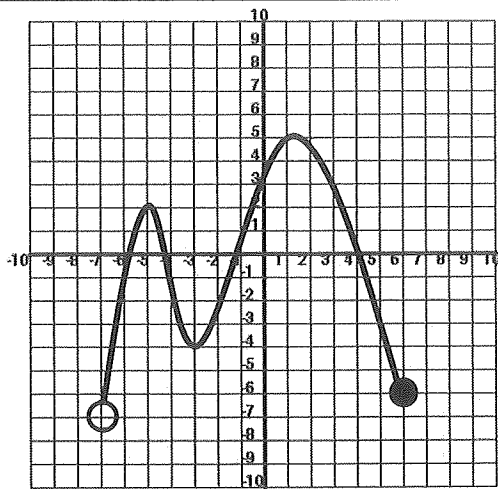
1



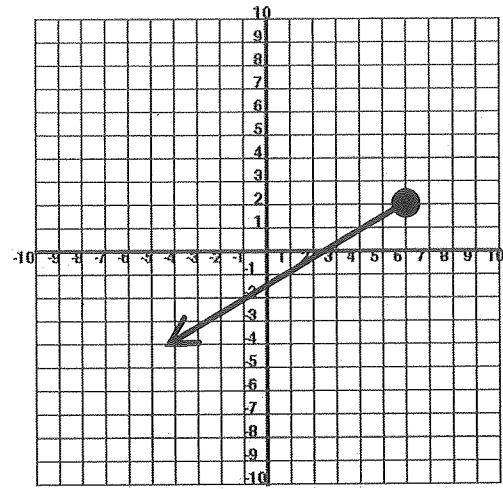
3



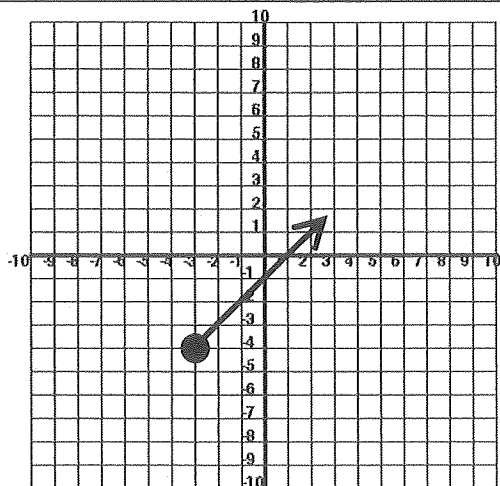
2



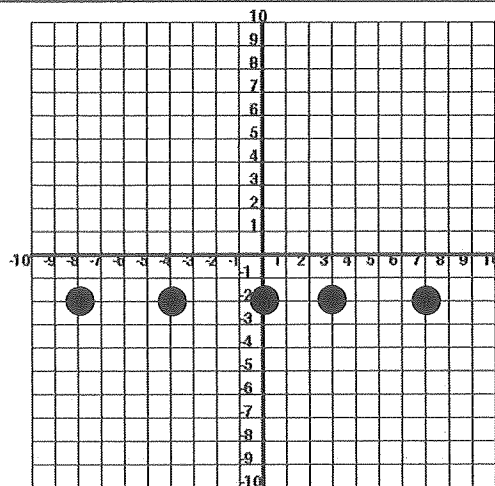
4



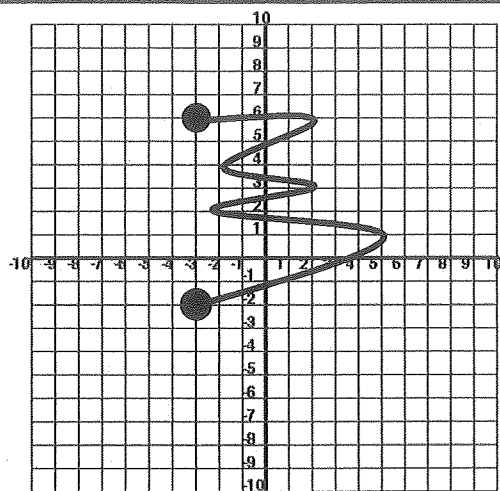
7



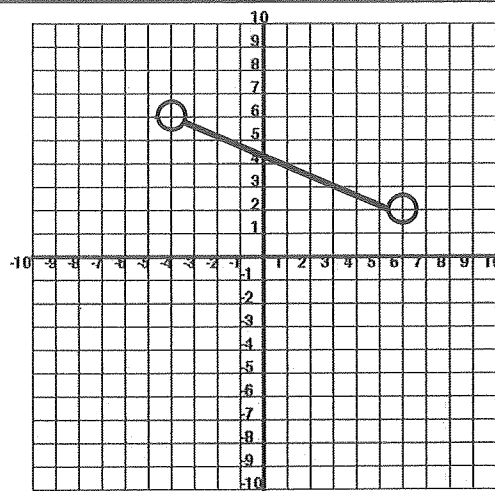
6



8



5



A	$-4 < x < 6$	A	$-4 < x < 6$
B	$-3 \leq x \leq 5$	B	$-3 \leq x \leq 5$
C	$\{-8, -4, 5, 9\}$	C	$\{-8, -4, 5, 9\}$
D	$-8 \leq x < 3$	D	$-8 \leq x < 3$
E	$x \geq -3$	E	$x \geq -3$
F	$x \leq 6$	F	$x \leq 6$
G	$\{-8, -4, 0, 3, 7\}$	G	$\{-8, -4, 0, 3, 7\}$
H	$-7 < x \leq 6$	H	$-7 < x \leq 6$

◇	$y \geq -4$	◇	$y \geq -4$
∞	$-2 \leq y \leq 6$	∞	$-2 \leq y \leq 6$
\$	$-4 \leq y \leq 7$	\$	$-4 \leq y \leq 7$
*	$-7 < y \leq 5$	*	$-7 < y \leq 5$
+	$\{-2\}$	+	$\{-2\}$
#	$\{-8, -4, 2, 3, 6\}$	#	$\{-8, -4, 2, 3, 6\}$
⌞	$y \leq 2$	⌞	$y \leq 2$
~	$2 < y < 6$	~	$2 < y < 6$